

Thursday 4th February 2021

Good morning Hedgehogs,  
I loved seeing all your dens yesterday and lots of you cooking!

Have a terrific Thursday.

Mrs Hoddy

**Subject Resources List**

**Handwriting:**

- Whiteboard
- Whiteboard pen
- OR
- Pencil
- Exercise Book/Paper

**Phonics:**

- Whiteboard
- Whiteboard pen
- Pencil
- Exercise book

**Maths:**

- Pencils
- Paper
- Exercise book
- Whiteboard
- Whiteboard pen

**Dough Disco**

your dough

**Music:**

Yumu login

**Geography:**

- a magnet,
- piece of tin foil,
- needle
- water

Handwriting  
(10 minutes)

Can you practice the letter **v**?

Try writing:


v

van

vroom

The van went vroom!

This video might help:



<https://www.youtube.com/watch?v=Www-EkGuQ5c>

Phonics Group  
1 (20-30  
minutes)

Today we are learning the 'i-e' digraph. Watch the phonics fairy's video below:



Yikes, ride my bike

Login details:

<https://ttsstorytimephonics.co.uk/>

Username: Sporle Primary

Password: XA\$Li@VB!QM8NqSh8iyeQHMg

**Task:** Go outside today on your bike or scooter and find words written on envelopes or paper. To make it even more fun, you could post them into a letter box, e.g. a basket.

Grown ups- if your child is not secure with the 'igh' trigraph you might also want to include some words with this sound.

pie

LI02416 - ie



lie

die

LI02416 - ie



LI02416 - ie



time

LI02416 - ie




tonight  
fright  
sight  
might

Phonics Group  
2 (20-30  
minutes)

Today we are learning the 'zh' digraph

Practise spelling 'it's' and 'don't' from your key skills pack.



Pirate Pete (p, p, Pirate Pete) says "That may be the treasure!" Can you hear the /s/ making a /zh/ sound in this word?

## Task:

Practise the words on this list using look, say, cover, write and check.

Hint: the /zh/ sound is spelt with an 's' in some words. Can you see a connection between any of these words that might help you to remember the spelling?



**Look**



**Say**



**Cover**



**Write**



**Check**

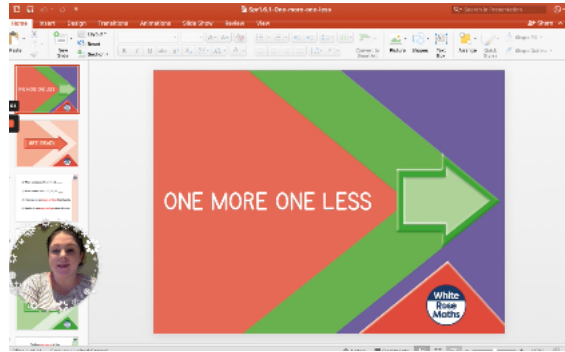
Word	1st try	2nd try	3rd try
treasure			
vision			
Asia			
usual			
casual			
measure			

Maths (20 minutes)

Today in maths we are learning to find one more and one less

Watch the teaching video and have a whiteboard and whiteboard pen ready:

<https://www.loom.com/share/d6d2791fe1e7488fbd38055d8225fa3f>

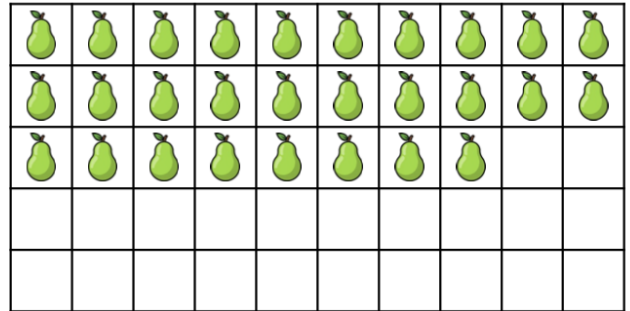


### Task A:

1 Complete the sentences.


a

There are \_\_\_\_\_ pears.  
One more than \_\_\_\_\_ is \_\_\_\_\_.  
One less than \_\_\_\_\_ is \_\_\_\_\_.



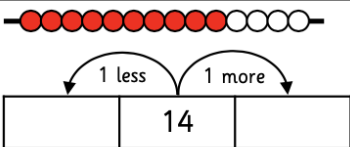
b

There are \_\_\_\_\_ apples.  
One more than \_\_\_\_\_ is \_\_\_\_\_.  
One less than \_\_\_\_\_ is \_\_\_\_\_.



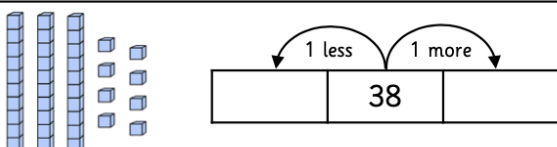
2 Find one more and one less.

a



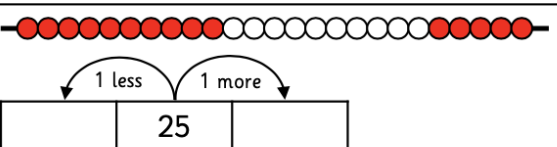
One more than \_\_\_\_\_ is \_\_\_\_\_.  
One less than \_\_\_\_\_ is \_\_\_\_\_.

b



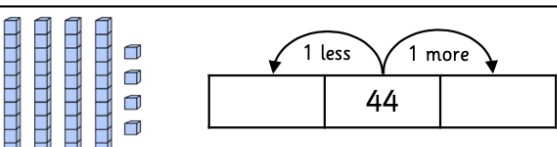
One more than \_\_\_\_\_ is \_\_\_\_\_.  
One less than \_\_\_\_\_ is \_\_\_\_\_.

c



One more than \_\_\_\_\_ is \_\_\_\_\_.  
One less than \_\_\_\_\_ is \_\_\_\_\_.

d



One more than \_\_\_\_\_ is \_\_\_\_\_.  
One less than \_\_\_\_\_ is \_\_\_\_\_.

1 Find one more and one less than the numbers shown on the number tracks.

a

11	12	13	14	15	16	17	18	19	20
----	----	----	----	----	----	----	----	----	----

One more than \_\_\_\_\_ is \_\_\_\_\_. One less than \_\_\_\_\_ is \_\_\_\_\_.

b

25	26	27	28	29	30	31	32	33	34
----	----	----	----	----	----	----	----	----	----

One more than \_\_\_\_\_ is \_\_\_\_\_. One less than \_\_\_\_\_ is \_\_\_\_\_.

c

32	33	34	35	36	37	38	39	40	41
----	----	----	----	----	----	----	----	----	----

One more than \_\_\_\_\_ is \_\_\_\_\_. One less than \_\_\_\_\_ is \_\_\_\_\_.

d

37	38	39	40	41	42	43	44	45	46
----	----	----	----	----	----	----	----	----	----

One more than \_\_\_\_\_ is \_\_\_\_\_. One less than \_\_\_\_\_ is \_\_\_\_\_.

2 Find one more and one less than the numbers shown on the number lines.

a

10	11	12	13	14	15	16	17	18	19	20
----	----	----	----	----	----	----	----	----	----	----

One more than \_\_\_\_\_ is \_\_\_\_\_. One less than \_\_\_\_\_ is \_\_\_\_\_.

b

20	21	22	23	24	25	26	27	28	29	30
----	----	----	----	----	----	----	----	----	----	----

One more than \_\_\_\_\_ is \_\_\_\_\_. One less than \_\_\_\_\_ is \_\_\_\_\_.

c

30	31	32	33	34	35	36	37	38	39	40
----	----	----	----	----	----	----	----	----	----	----

One more than \_\_\_\_\_ is \_\_\_\_\_. One less than \_\_\_\_\_ is \_\_\_\_\_.

d

40	41	42	43	44	45	46	47	48	49	50
----	----	----	----	----	----	----	----	----	----	----

One more than \_\_\_\_\_ is \_\_\_\_\_. One less than \_\_\_\_\_ is \_\_\_\_\_.

### Parent answers:

1 Complete the sentences.

a

There are 28 pears.

One more than 28 is 29.

One less than 28 is 27.

🍐	🍐	🍐	🍐	🍐	🍐	🍐	🍐	🍐	🍐	🍐
🍐	🍐	🍐	🍐	🍐	🍐	🍐	🍐	🍐	🍐	🍐
🍐	🍐	🍐	🍐	🍐	🍐	🍐	🍐	🍐		

b

There are 43 apples.

One more than 43 is 44.

One less than 43 is 42.

🍏	🍏	🍏	🍏	🍏	🍏	🍏	🍏	🍏	🍏	🍏
🍏	🍏	🍏	🍏	🍏	🍏	🍏	🍏	🍏	🍏	🍏
🍏	🍏	🍏	🍏	🍏	🍏	🍏	🍏	🍏	🍏	🍏
🍏	🍏	🍏	🍏	🍏	🍏	🍏	🍏	🍏	🍏	

2 Find one more and one less.

a

13	14	15
----	----	----

One more than 14 is 15.

One less than 14 is 13.

b

37	38	39
----	----	----

One more than 38 is 39.

One less than 38 is 37.

c

24	25	26
----	----	----

One more than 25 is 26.

One less than 25 is 24.

d

43	44	45
----	----	----

One more than 44 is 45.

One less than 44 is 43.

1 Find one more and one less than the numbers shown on the number tracks.

a

11	12	13	14	15	16	17	18	19	20
----	----	----	----	----	----	----	----	----	----

One more than 17 is 18. One less than 17 is 16.

b

25	26	27	28	29	30	31	32	33	34
----	----	----	----	----	----	----	----	----	----

One more than 28 is 29. One less than 28 is 27.

c

32	33	34	35	36	37	38	39	40	41
----	----	----	----	----	----	----	----	----	----

One more than 34 is 35. One less than 34 is 33.

d

37	38	39	40	41	42	43	44	45	46
----	----	----	----	----	----	----	----	----	----

One more than 45 is 46. One less than 45 is 44.

2 Find one more and one less than the numbers shown on the number lines.

a

10	11	12	13	14	15	16	17	18	19	20
----	----	----	----	----	----	----	----	----	----	----

One more than 13 is 14. One less than 13 is 12.

b

20	21	22	23	24	25	26	27	28	29	30
----	----	----	----	----	----	----	----	----	----	----

One more than 25 is 26. One less than 25 is 24.

c

30	31	32	33	34	35	36	37	38	39	40
----	----	----	----	----	----	----	----	----	----	----

One more than 38 is 39. One less than 38 is 37.

d

40	41	42	43	44	45	46	47	48	49	50
----	----	----	----	----	----	----	----	----	----	----

One more than 41 is 42. One less than 41 is 40.

## Task B:

1 Find one more and one less.

a

One more than \_\_\_\_\_ is \_\_\_\_\_.  
One less than \_\_\_\_\_ is \_\_\_\_\_.

b

One more than \_\_\_\_\_ is \_\_\_\_\_.  
One less than \_\_\_\_\_ is \_\_\_\_\_.

c

One more than \_\_\_\_\_ is \_\_\_\_\_.  
One less than \_\_\_\_\_ is \_\_\_\_\_.

d

One more than \_\_\_\_\_ is \_\_\_\_\_.  
One less than \_\_\_\_\_ is \_\_\_\_\_.



2 Find one more and one less than the numbers shown on the number tracks.

a



One more than \_\_\_\_\_ is \_\_\_\_\_.

One less than \_\_\_\_\_ is \_\_\_\_\_.

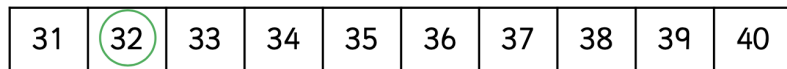
b



One more than \_\_\_\_\_ is \_\_\_\_\_.

One less than \_\_\_\_\_ is \_\_\_\_\_.

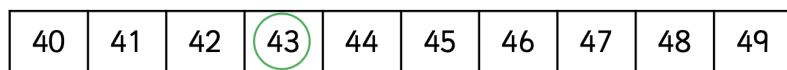
c



One more than \_\_\_\_\_ is \_\_\_\_\_.

One less than \_\_\_\_\_ is \_\_\_\_\_.

d

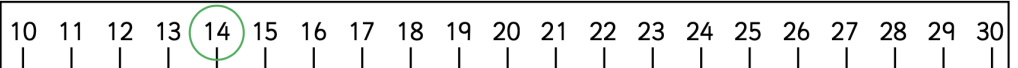


One more than \_\_\_\_\_ is \_\_\_\_\_.

One less than \_\_\_\_\_ is \_\_\_\_\_.

1 Find one more and one less.

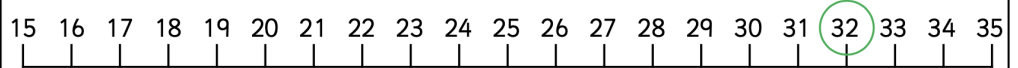
a



One more than \_\_\_\_\_ is \_\_\_\_\_.

One less than \_\_\_\_\_ is \_\_\_\_\_.

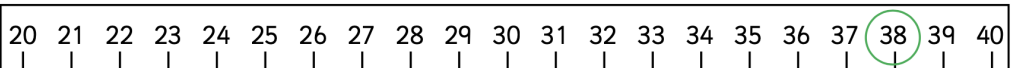
b



One more than \_\_\_\_\_ is \_\_\_\_\_.

One less than \_\_\_\_\_ is \_\_\_\_\_.

c



One more than \_\_\_\_\_ is \_\_\_\_\_.

One less than \_\_\_\_\_ is \_\_\_\_\_.

d



One more than \_\_\_\_\_ is \_\_\_\_\_.

One less than \_\_\_\_\_ is \_\_\_\_\_.

2 Complete the table.

One less	Number	One more
	32	
		12
14		
	26	
		47
19		
	34	
		45
23		

*Extension Question:*

Use the clues to work out the number.

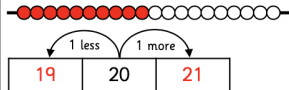
- I have a number with 3 tens.
- One less than my number makes the tens digit change.
- One more than my number has 1 one.

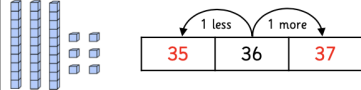
What is my number?

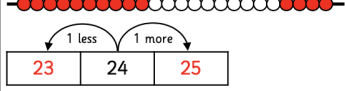
Can you make some clues to describe your secret number?

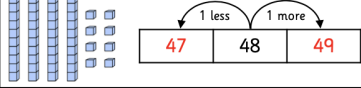
*Parent answers:*

1 Find one more and one less.


a  One more than 20 is 21.  
One less than 20 is 19.


b  One more than 36 is 37.  
One less than 36 is 35.

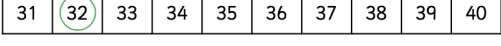
c  One more than 24 is 25.  
One less than 24 is 23.

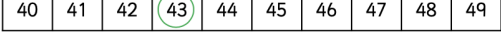
d  One more than 48 is 49.  
One less than 48 is 47.

2 Find one more and one less than the numbers shown on the number tracks.

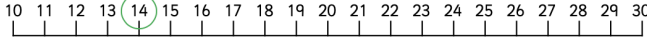
a  One more than 15 is 16. One less than 15 is 14.

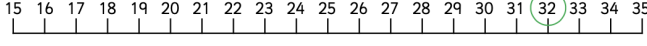
b  One more than 25 is 26. One less than 25 is 24.

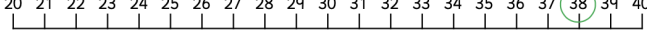
c  One more than 32 is 33. One less than 32 is 31.

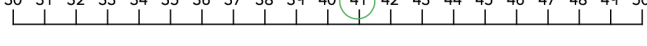
d  One more than 43 is 44. One less than 43 is 42.

1 Find one more and one less. Complete the sentences.

a  One more than 14 is 15. One less than 14 is 13.

b  One more than 32 is 33. One less than 32 is 31.

c  One more than 38 is 39. One less than 38 is 37.

d  One more than 41 is 42. One less than 41 is 40.

2 Complete the table.

One less	Number	One more
31	32	33
10	11	12
14	15	16
25	26	27
45	46	47
19	20	21
33	34	35
43	44	45
23	24	25

Literacy (20-30 minutes)

**Task:** Over today and tomorrow I would like you to write your sentences to go with the pictures for your book 'Lost and Found' e.g.

A boy called Samuel found a penguin on his front door step.

He took him to lost and found.

### Task B:

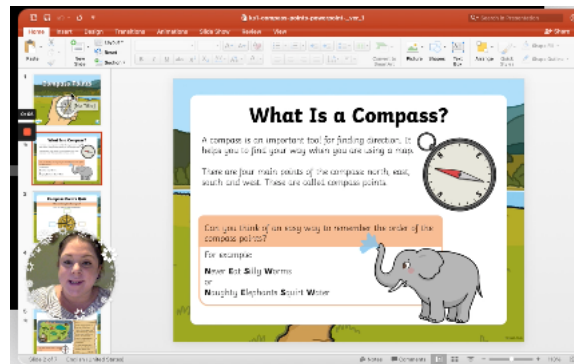
You could try adding some exclamation marks and describing words to make your sentences more interesting.

Geography (15-20 minutes)

What is a compass and how can you make a compass at home?

Watch the teaching video below:

<https://www.loom.com/share/6474349ab9d544809400da0fd167605>




Here is a video showing you how you can make a compass from a magnet, piece of tin foil, needle and water.

[https://www.youtube.com/watch?v=ldSG\\_qVF83M](https://www.youtube.com/watch?v=ldSG_qVF83M)

### Task:

Make yourself a compass and figure out which way these things face:

- The front door
- Your bed
- The fridge

	<ul style="list-style-type: none"> <li>• Something outside your house</li> </ul> <p>Take a picture of each of these with you using your homemade compass!</p>
<p>Story time/ Dough Disco</p>	<p>Watch the video below:</p> <p><a href="https://www.youtube.com/watch?v=BOLR3pQt8zg">https://www.youtube.com/watch?v=BOLR3pQt8zg</a></p> 
<p>Cosmic Kids Yoga/Singing</p>	<p>Log into your YUMU account and have a go at doing a music session:</p> <p><a href="https://charanga.com/yumu/login?redirected_from_cmw=y">https://charanga.com/yumu/login?redirected_from_cmw=y</a></p> <p>Use your login details we have provided. Drop me a message on Class Dojo if you have problems accessing the site.</p> 