

Thursday 4th February 2021

Hello everyone,

Just a quick message to say you are all doing FABULOUS!

We are doing some of the YUMU online music again so if you need your login message me and I will send it to you.

Don't forget to do the PE Challenges! Also, for our zoom call tomorrow we are doing to do a 'dress up theme' of 'what makes you you?' for Children's Mental Health Week. So, dress up in something that defines you!

I hope you all have a fun day and enjoy doing the learning!

Mrs Cole

When you  
stop & look around,  
life is pretty  
amazing.



**Children's Mental Health Week**  
**5 Outdoor Activities**

	Go outside and close your eyes. What can you hear?	Monday
Tuesday	Stand in an outdoor space. What is the weather doing? What does it feel like? How does it make you feel?	
	Can you spot any signs of spring? How many can you find?	Wednesday
Thursday	Watch the clouds. Look up at the sky in the morning, afternoon and early evening. How has it changed?	
	Have fun! Go for a walk, play a game, run, jump, skip or hop.	Friday

 **Teach Outdoors**  
*Learning Through Discovery*

[www.teachoutdoors.co.uk](http://www.teachoutdoors.co.uk)

 @teachoutdoors  @teach\_outdoors  @teach\_outdoors

## Subject Resources List

### Handwriting:

- Whiteboard
- Whiteboard pen
- OR
- Pencil
- Exercise Book/Paper

### Phonics:

- Whiteboard
- Whiteboard pen
- Pencil
- Exercise book

### Maths:

- Pencils
- Paper
- Exercise book
- Whiteboard
- Whiteboard pen

### Literacy:

- Your story map drawings from yesterday
- Exercise book or paper
- Pencil
- Phonics mat

### Dough Disco:

- Your dough

### Music:

- Yumu login

### Geography:

- a magnet
- piece of tin foil
- needle
- water

PE for the  
whole week

Remember to take part in the PE challenges for this week and don't forget to send me your scores (outlined in the document posted on ClassDojo).

Handwriting  
(10 minutes)

Can you practice the letter **v**?

Try writing:


v

van

vroom

The van went vroom!

This video might help:



<https://www.youtube.com/watch?v=Www-EkGuQ5c>

Phonics Group  
1 (20-30  
minutes)

Today we are learning the split digraph 'i-e'.  
Watch the Phonics Fairies video below:



Login details:

<https://ttsstorytimephonics.co.uk/>

Username: Spørle Primary

Password: XA\$li@VB!QM8NqSh8iyeQHMG


**Task:**

Write these words on to pieces of paper and fold into a letter. Read the word and post the letters into the correct 'letter box' (3 containers). One letter box for words with the trigraph 'igh', another for the words with the split digraph 'i-e' and one for the words with the digraph 'ie'.

prize bike pie polite slide lie  
time tie light

Today we are learning the 'zh' digraph

Practise spelling **it's** and **don't** from your key skills pack. Note that **it's** is a contraction for **it is** and **don't** is a contraction for **do not**.



Pirate Pete (p, p, Pirate Pete) says "That may be the treasure!" Can you hear the /s/ making a /zh/ sound in this word?

Task:

Practise the words on this list using look, say, cover, write and check.

Hint: the /zh/ sound is spelt with an 's' in some words. Can you see a connection between any of these words that might help you to remember the spelling?



Look



Say



Cover



Write



Check

Word	1st try	2nd try	3rd try
treasure			
vision			
Asia			
usual			
casual			
measure			

Maths (20 minutes)

Today in maths we are learning to

Watch the teaching video and have a whiteboard and whiteboard pen ready:



Year 1 Maths Thursday 4th February 2021

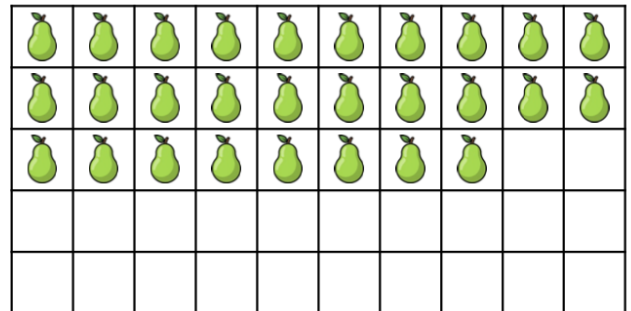
<https://www.loom.com/share/b2eea67e318348419c455f069067e588>

### Task A:

1 Complete the sentences.


a

There are \_\_\_\_\_ pears.  
One more than \_\_\_\_\_ is  
\_\_\_\_\_.  
One less than \_\_\_\_\_ is  
\_\_\_\_\_.



b

There are \_\_\_\_\_ apples.  
One more than \_\_\_\_\_ is  
\_\_\_\_\_.  
One less than \_\_\_\_\_ is  
\_\_\_\_\_.



2 Find one more and one less.

a

One more than \_\_\_\_\_ is \_\_\_\_\_.  
One less than \_\_\_\_\_ is \_\_\_\_\_.

b

One more than \_\_\_\_\_ is \_\_\_\_\_.  
One less than \_\_\_\_\_ is \_\_\_\_\_.

c

One more than \_\_\_\_\_ is \_\_\_\_\_.  
One less than \_\_\_\_\_ is \_\_\_\_\_.

d

One more than \_\_\_\_\_ is \_\_\_\_\_.  
One less than \_\_\_\_\_ is \_\_\_\_\_.

1 Find one more and one less than the numbers shown on the number tracks.

a

11	12	13	14	15	16	17	18	19	20
----	----	----	----	----	----	----	----	----	----

One more than \_\_\_\_\_ is \_\_\_\_\_. One less than \_\_\_\_\_ is \_\_\_\_\_.

b

25	26	27	28	29	30	31	32	33	34
----	----	----	----	----	----	----	----	----	----

One more than \_\_\_\_\_ is \_\_\_\_\_. One less than \_\_\_\_\_ is \_\_\_\_\_.

c

32	33	34	35	36	37	38	39	40	41
----	----	----	----	----	----	----	----	----	----

One more than \_\_\_\_\_ is \_\_\_\_\_. One less than \_\_\_\_\_ is \_\_\_\_\_.

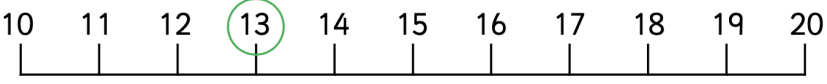
d

37	38	39	40	41	42	43	44	45	46
----	----	----	----	----	----	----	----	----	----

One more than \_\_\_\_\_ is \_\_\_\_\_. One less than \_\_\_\_\_ is \_\_\_\_\_.

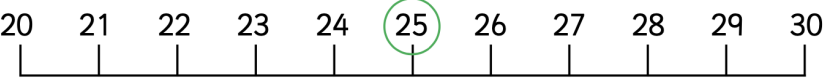
2 Find one more and one less than the numbers shown on the number lines.

a



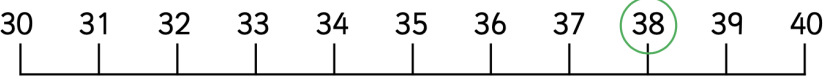
One more than 13 is 14. One less than 13 is 12.

b



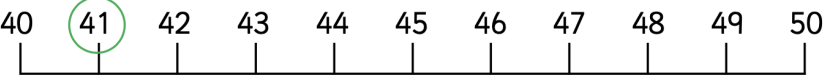
One more than 25 is 26. One less than 25 is 24.

c



One more than 38 is 39. One less than 38 is 37.

d



One more than 41 is 42. One less than 41 is 40.

### Parent answers:

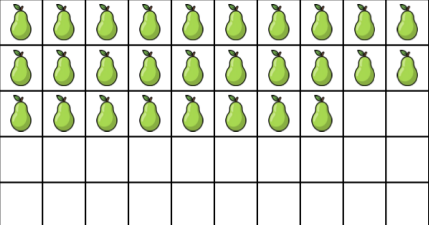
1 Complete the sentences.

a

There are 28 pears.

One more than 28 is 29.

One less than 28 is 27.




b

There are 43 apples.

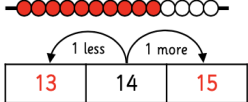
One more than 43 is 44.

One less than 43 is 42.



2 Find one more and one less.

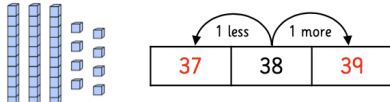
a



One more than 14 is 15.

One less than 14 is 13.

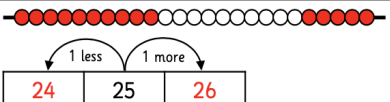
b



One more than 38 is 39.

One less than 38 is 37.

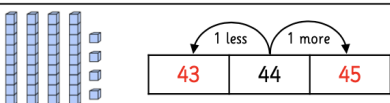
c



One more than 25 is 26.

One less than 25 is 24.

d




One more than 44 is 45.

One less than 44 is 43.

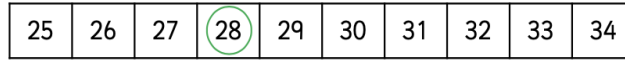
1 Find one more and one less than the numbers shown on the number tracks.

a




One more than 17 is 18. One less than 17 is 16.

b



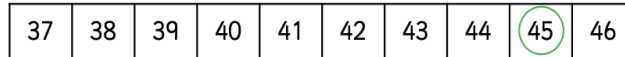
One more than 28 is 29. One less than 28 is 27.

c



One more than 34 is 35. One less than 34 is 33.

d



One more than 45 is 46. One less than 45 is 44.

2 Find one more and one less than the numbers shown on the number lines.

a



One more than 13 is 14. One less than 13 is 12.

b



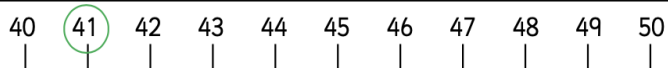
One more than 25 is 26. One less than 25 is 24.

c



One more than 38 is 39. One less than 38 is 37.

d



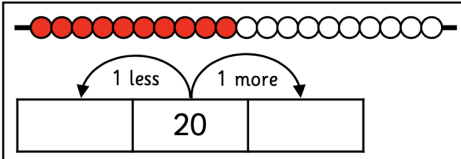
One more than 41 is 42. One less than 41 is 40.



## Task B:

1 Find one more and one less.

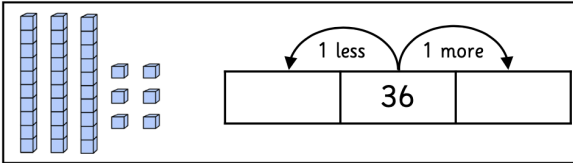
a



One more than \_\_\_\_\_ is \_\_\_\_\_.

One less than \_\_\_\_\_ is \_\_\_\_\_.

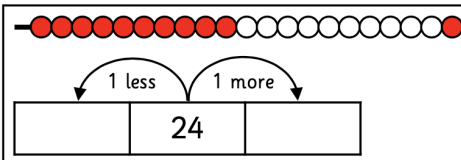
b



One more than \_\_\_\_\_ is \_\_\_\_\_.

One less than \_\_\_\_\_ is \_\_\_\_\_.

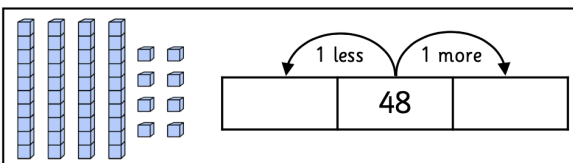
c



One more than \_\_\_\_\_ is \_\_\_\_\_.

One less than \_\_\_\_\_ is \_\_\_\_\_.

d



One more than \_\_\_\_\_ is \_\_\_\_\_.

One less than \_\_\_\_\_ is \_\_\_\_\_.

2 Find one more and one less than the numbers shown on the number tracks.

a

11	12	13	14	15	16	17	18	19	20
----	----	----	----	----	----	----	----	----	----

One more than \_\_\_\_\_ is \_\_\_\_\_.

One less than \_\_\_\_\_ is \_\_\_\_\_.

b

20	21	22	23	24	25	26	27	28	29
----	----	----	----	----	----	----	----	----	----

One more than \_\_\_\_\_ is \_\_\_\_\_.

One less than \_\_\_\_\_ is \_\_\_\_\_.

c

31	32	33	34	35	36	37	38	39	40
----	----	----	----	----	----	----	----	----	----

One more than \_\_\_\_\_ is \_\_\_\_\_.

One less than \_\_\_\_\_ is \_\_\_\_\_.

d

40	41	42	43	44	45	46	47	48	49
----	----	----	----	----	----	----	----	----	----

One more than \_\_\_\_\_ is \_\_\_\_\_.

One less than \_\_\_\_\_ is \_\_\_\_\_.

1 Find one more and one less.

a

10 11 12 13 14 15 16 17 18 19 20 21 22 23 24 25 26 27 28 29 30

One more than \_\_\_\_\_ is \_\_\_\_\_. One less than \_\_\_\_\_ is \_\_\_\_\_.

b

15 16 17 18 19 20 21 22 23 24 25 26 27 28 29 30 31 32 33 34 35

One more than \_\_\_\_\_ is \_\_\_\_\_. One less than \_\_\_\_\_ is \_\_\_\_\_.

c

20 21 22 23 24 25 26 27 28 29 30 31 32 33 34 35 36 37 38 39 40

One more than \_\_\_\_\_ is \_\_\_\_\_. One less than \_\_\_\_\_ is \_\_\_\_\_.

d

30 31 32 33 34 35 36 37 38 39 40 41 42 43 44 45 46 47 48 49 50

One more than \_\_\_\_\_ is \_\_\_\_\_. One less than \_\_\_\_\_ is \_\_\_\_\_.

2 Complete the table.

One less	Number	One more
	32	
		12
14		
	26	
		47
19		
	34	
		45
23		

**Extension Question:**

Use the clues to work out the number.

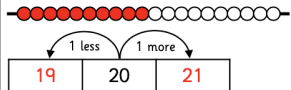
- I have a number with 3 tens.
- One less than my number makes the tens digit change.
- One more than my number has 1 one.

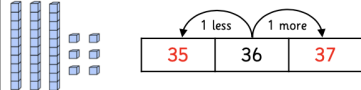
What is my number?

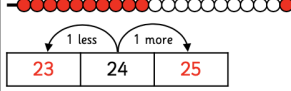
Can you make some clues to describe your secret number?

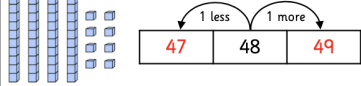
## Parent answers:

1 Find one more and one less.


a  One more than 20 is 21.  
One less than 20 is 19.


b  One more than 36 is 37.  
One less than 36 is 35.

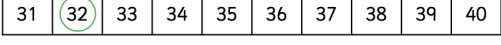
c  One more than 24 is 25.  
One less than 24 is 23.

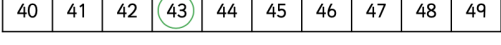
d  One more than 48 is 49.  
One less than 48 is 47.

2 Find one more and one less than the numbers shown on the number tracks.

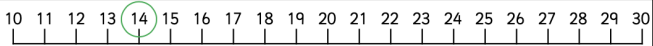
a  One more than 15 is 16. One less than 15 is 14.

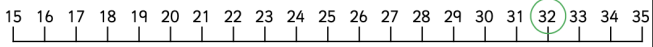
b  One more than 25 is 26. One less than 25 is 24.

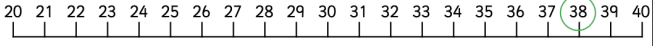
c  One more than 32 is 33. One less than 32 is 31.

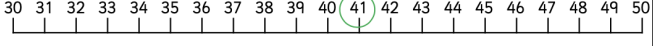
d  One more than 43 is 44. One less than 43 is 42.

1 Find one more and one less. Complete the sentences.

a  One more than 14 is 15. One less than 14 is 13.

b  One more than 32 is 33. One less than 32 is 31.

c  One more than 38 is 39. One less than 38 is 37.

d  One more than 41 is 42. One less than 41 is 40.

2 Complete the table.

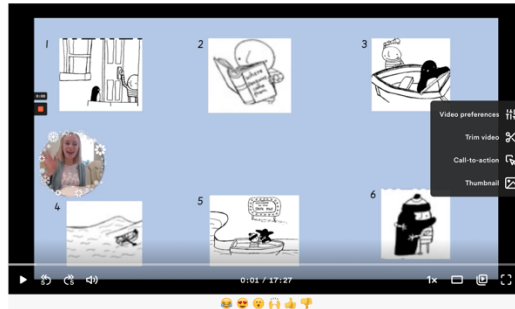
One less	Number	One more
31	32	33
10	11	12
14	15	16
25	26	27
45	46	47
19	20	21
33	34	35
43	44	45
23	24	25

Literacy (20-30 minutes)

## Lost and Found Story Writing

**Task:** Over today and tomorrow I would like you to write your sentences to go with the pictures for your book 'Lost and Found' e.g.

Watch the teaching video where I model how to do this:



Year 1 Literacy Thursday 4th February 2021

<https://www.loom.com/share/7abec004e6c944d1a2ec057f509eb895>

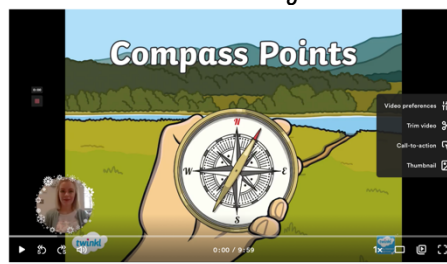
### Task B:

You could try adding some exclamation marks and adjectives (describing words) to make your sentences more interesting.

Geography (15-20 minutes)

What is a compass and how can you make a compass at home?

Watch the teaching video below:




Geography Thursday 4th February 2021

<https://www.loom.com/share/6321b387f8dc406bbde8b645682592ae>

Here is a video showing you how you can make a compass from a magnet, piece of tin foil, needle and water.

<https://www.youtube.com/watch?v=ldSGqVF83M>

	<p><b>Task:</b> Make yourself a compass and figure out which way these things face:</p> <ul style="list-style-type: none"> <li>• The front door</li> <li>• Your bed</li> <li>• The fridge</li> <li>• Something outside your house</li> </ul> <p>Take a picture of each of these with you using your homemade compass!</p>
<p>Story time/ Dough Disco</p>	<p>Watch the video below: <a href="https://www.youtube.com/watch?v=BOLR3pQt8zg">https://www.youtube.com/watch?v=BOLR3pQt8zg</a></p> 
<p>Cosmic Kids Yoga/Singing</p>	<p>Log into your YUMU account and have a go at doing a music session: <a href="https://charanga.com/yumu/login?redirected_from_cmw=y">https://charanga.com/yumu/login?redirected_from_cmw=y</a></p> <p>Use your login details we have provided. Drop me a message on Class Dojo if you have problems accessing the site.</p> 